

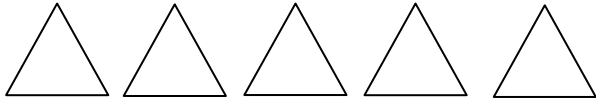
Name \_\_\_\_\_

Date \_\_\_\_\_

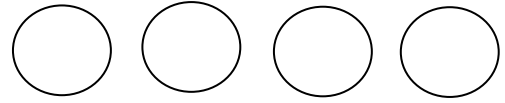
Topic: Color fractions - Worksheet 1

Directions: Color the picture to show the fraction for problems 1-7. Write the part of the fraction for problems 8-10

1.  $\frac{1}{5}$



2.  $\frac{3}{4}$



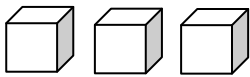
3.  $\frac{5}{6}$



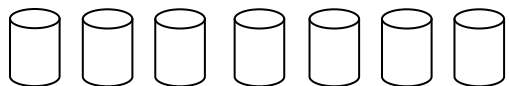
4.  $\frac{2}{5}$



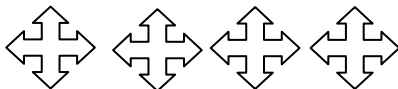
5.  $\frac{2}{3}$



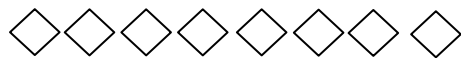
6.  $\frac{6}{7}$



7.  $\frac{1}{4}$




8.



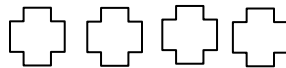
$\frac{5}{8} = 5$  part of \_\_\_\_

9.



\_\_\_\_ = 5 part of \_\_\_\_

10.



\_\_\_\_ = 3 part of \_\_\_\_



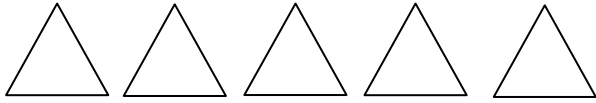
Name \_\_\_\_\_

Date \_\_\_\_\_

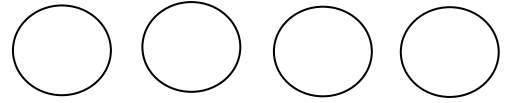
Topic: Color fractions - Worksheet 2

Directions: Color the picture to show the fraction for problems 1-7. Write the part of the fraction for problems 8-10

1.  $\frac{3}{5}$



2.  $\frac{2}{4}$



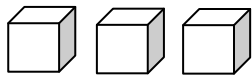
3.  $\frac{4}{6}$



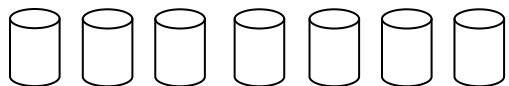
4.  $\frac{1}{5}$



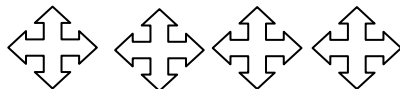
5.  $\frac{2}{3}$



6.  $\frac{3}{7}$



7.  $\frac{3}{4}$



8.



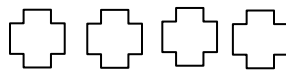
$\frac{4}{6} = 4$  part of \_\_\_\_

9.



\_\_\_\_ = 2 part of \_\_\_\_

10.



\_\_\_\_ = 3 part of \_\_\_\_



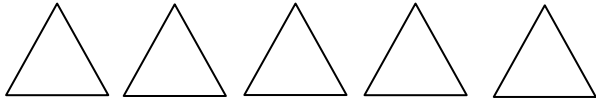
Name \_\_\_\_\_

Date \_\_\_\_\_

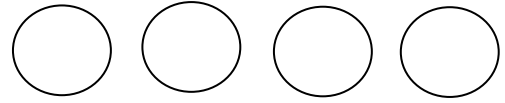
Topic: Color fractions - Worksheet 3

Directions: Color the picture to show the fraction for problems 1-7. Write the part of the fraction for problems 8-10

1.  $\frac{3}{5}$



2.  $\frac{1}{4}$



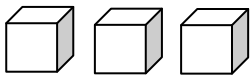
3.  $\frac{5}{6}$



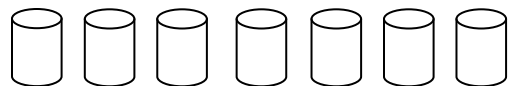
4.  $\frac{2}{5}$



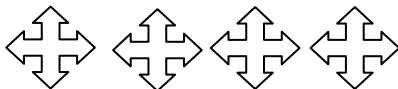
5.  $\frac{2}{3}$



6.  $\frac{1}{7}$



7.  $\frac{3}{4}$



8.

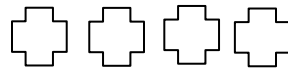


9.



\_\_\_ = **3** part of \_\_\_

10.



\_\_\_ = 2 part of



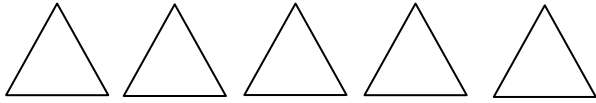
Name \_\_\_\_\_

Date \_\_\_\_\_

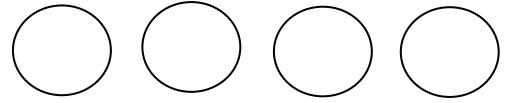
Topic: Color fractions - Worksheet 4

Directions: Color the picture to show the fraction for problems 1-7. Write the part of the fraction for problems 8-10

1.  $\frac{2}{5}$



2.  $\frac{2}{4}$



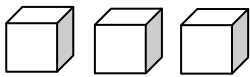
3.  $\frac{4}{6}$



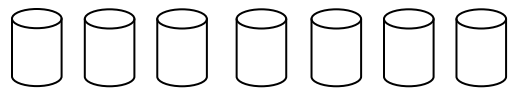
4.  $\frac{3}{5}$



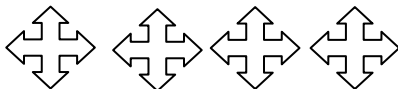
5.  $\frac{1}{3}$



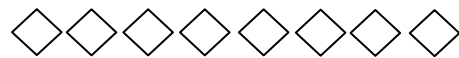
6.  $\frac{5}{7}$



7.  $\frac{2}{4}$




8.



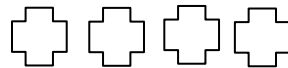
$\frac{5}{8} = 5$  part of \_\_\_\_

9.



\_\_\_\_ = 4 part of \_\_\_\_

10.



\_\_\_\_ = 3 part of \_\_\_\_



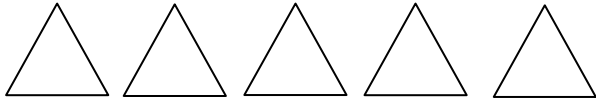
Name \_\_\_\_\_

Date \_\_\_\_\_

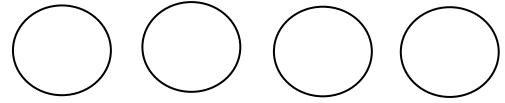
Topic: Color fractions - Worksheet 5

Directions: Color the picture to show the fraction for problems 1-7. Write the part of the fraction for problems 8-10

1.  $\frac{4}{5}$



2.  $\frac{1}{4}$



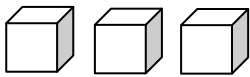
3.  $\frac{2}{6}$



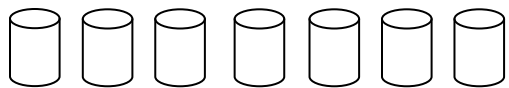
4.  $\frac{4}{5}$



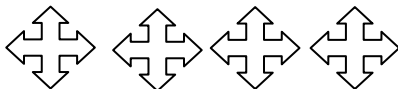
5.  $\frac{1}{3}$



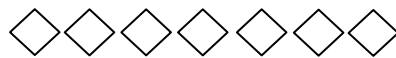
6.  $\frac{3}{7}$



7.  $\frac{3}{4}$




8.



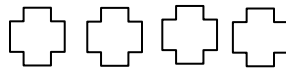
$\frac{6}{7} = 6$  part of \_\_\_\_

9.



\_\_\_\_ = 2 part of \_\_\_\_

10.



\_\_\_\_ = 1 part of \_\_\_\_

