

Name: _____

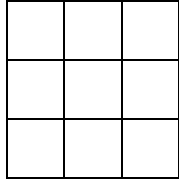
Date _____

Making Fractions Practice Worksheet

Color each shape as indicated by the fraction:

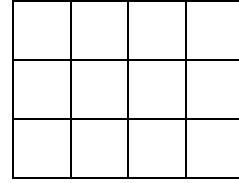
1

$$\frac{2}{9}$$



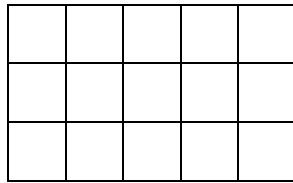
2

$$\frac{5}{12}$$



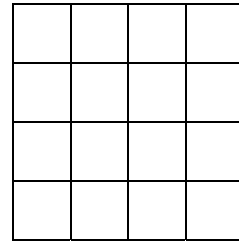
3

$$\frac{10}{15}$$



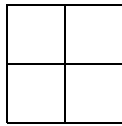
4

$$\frac{2}{16}$$



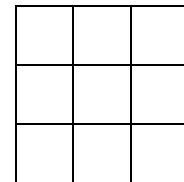
5

$$\frac{4}{4}$$



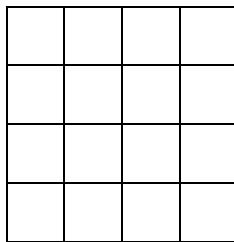
6

$$\frac{8}{9}$$



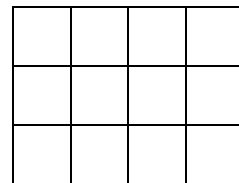
7

$$\frac{1}{16}$$



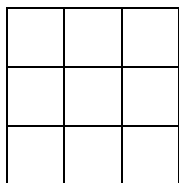
8

$$\frac{7}{12}$$



9

$$\frac{4}{9}$$



10

$$\frac{1}{3}$$

