

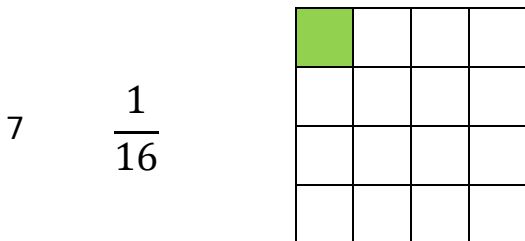

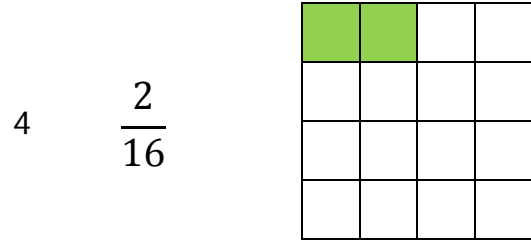
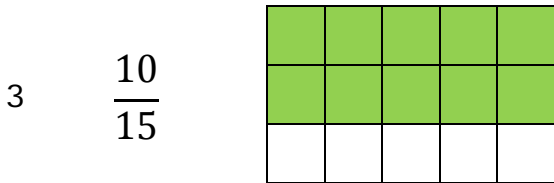

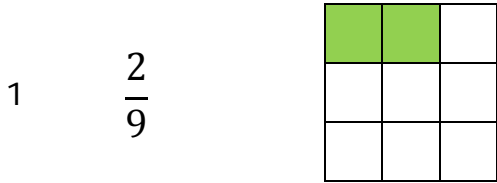


Name: \_\_\_\_\_

Date \_\_\_\_\_

### Making Fractions Practice Worksheet Answer Key

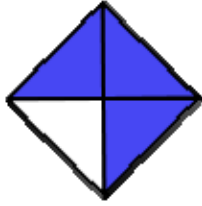


Name: \_\_\_\_\_

Date \_\_\_\_\_

### Writing Fractions Practice Worksheet 1 Answers

1



$\frac{3}{4}$

2



$\frac{1}{9}$

3



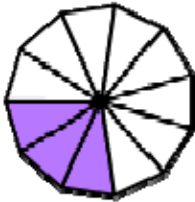
$\frac{9}{10}$

4



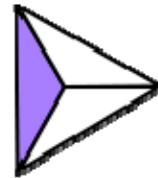
$\frac{8}{11}$

5




$\frac{3}{11}$

6



$\frac{1}{3}$

7



$\frac{5}{7}$

8



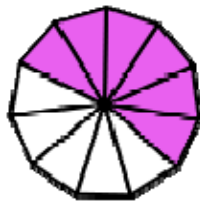
$\frac{5}{9}$

9



$\frac{1}{2}$

10



$\frac{6}{11}$

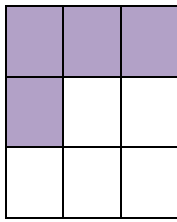


Name: \_\_\_\_\_

Date \_\_\_\_\_

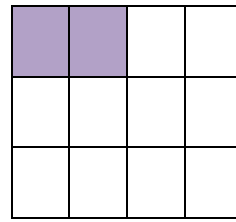
### Writing Fractions Practice Worksheet 2 Answers

1



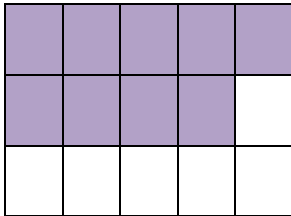
$$\frac{4}{9}$$

2



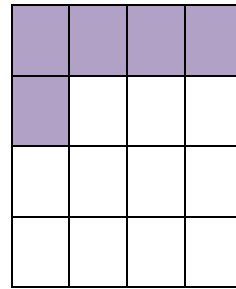
$$\frac{2}{12}$$

3




$$\frac{9}{15}$$

4



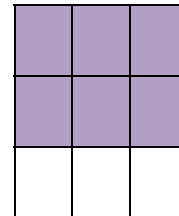
$$\frac{5}{16}$$

5




$$\frac{10}{12}$$

6



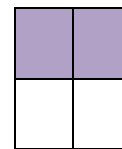
$$\frac{6}{9}$$

7



$$\frac{7}{16}$$

8



$$\frac{2}{4}$$

