



COUNTING RECTANGULAR ARRAYS


Addition problems can be made by using rectangular arrays.



$$3 + 2 = 5$$



$$5 + 3 = 8$$



$$5 + 4 = 9$$