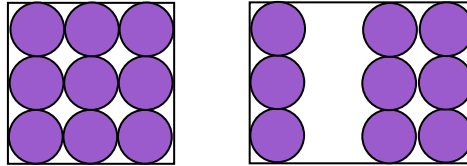


Name _____

Date _____

Using Math Symbols to Compare Numbers Worksheet

Fill in the blank.



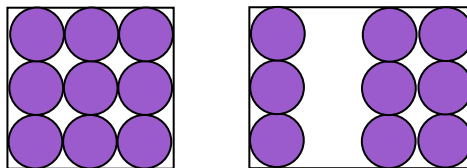
$$9 \text{ ____ } 3 + 6$$

Nine _____ three plus six.

In the first block of square, there are 9 circles. In the second block, there is a group of 3 and 6 circles. 3 and 6 makes a total of 9.

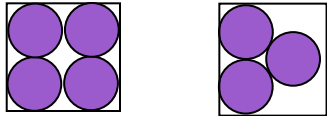
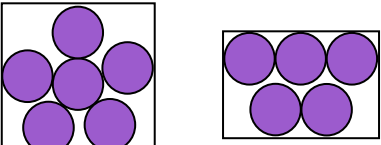
Now we compare the two groups. The first group has 9 circles. The second group also has 9 circles.

So, we fill the table as:



$$9 \text{ ____ } 3 + 6$$

Nine equals three plus six.**Practice Problems**

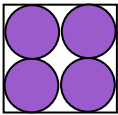
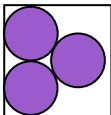
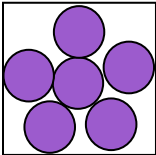
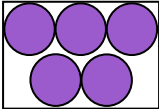
1	 $4 \text{ ____ } 3$ Four _____ three.	2	 $6 \text{ ____ } 5$ Six _____ five.
---	---	---	--



Name _____

Date _____

Answer Key

1	  $4 \neq 3$ Four <u>is not equal to</u> three.	2	  $6 \neq 5$ Six <u>is not equal to</u> five.
---	---	---	--

