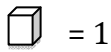


Name \_\_\_\_\_

Date \_\_\_\_\_

# Working with Ones, Tens, and Hundreds Blocks Worksheet 1

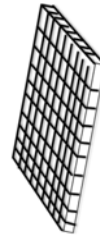
Find the value of each group of base 10 blocks



= 1

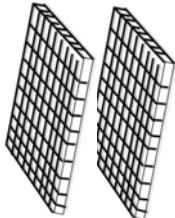


= 10



= 100

1)



\_\_\_\_\_

hundreds



\_\_\_\_\_

tens



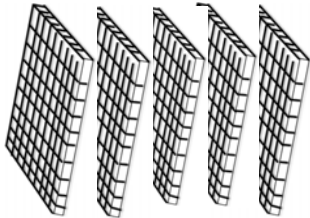
\_\_\_\_\_

ones

\_\_\_\_\_

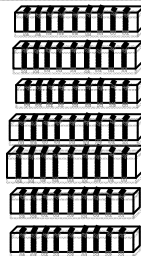
Total

2)



\_\_\_\_\_

hundreds



\_\_\_\_\_

tens




\_\_\_\_\_

ones

\_\_\_\_\_

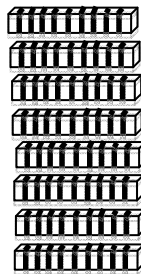
Total

3)



\_\_\_\_\_

hundreds



\_\_\_\_\_

tens



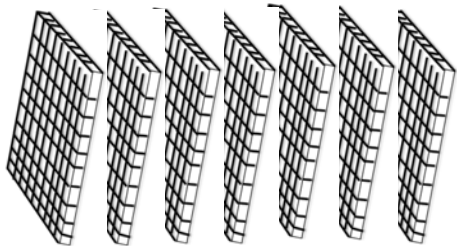
\_\_\_\_\_

ones

\_\_\_\_\_

Total

4)



\_\_\_\_\_

hundreds



\_\_\_\_\_

tens



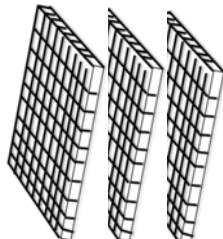
\_\_\_\_\_

ones

\_\_\_\_\_

Total

5)



\_\_\_\_\_

hundreds



\_\_\_\_\_

tens



\_\_\_\_\_

ones

\_\_\_\_\_

Total