

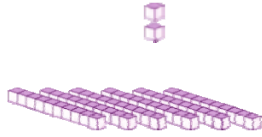
Name _____

Date _____

Base Ten and Hundreds Blocks Worksheet

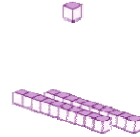

Find the value of each group of base ten blocks.

1



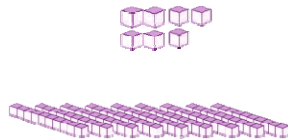

The value of these base ten blocks is _____.

2



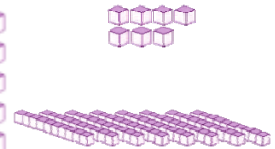
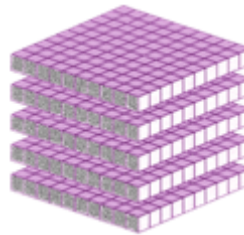
The value of these base ten blocks is _____.

3



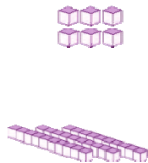

The value of these base ten blocks is _____.

4



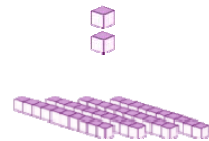

The value of these base ten blocks is _____.

5



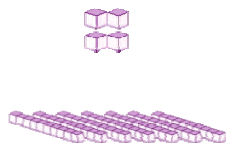

The value of these base ten blocks is _____.

6



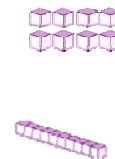

The value of these base ten blocks is _____.

7



The value of these base ten blocks is _____.

8



The value of these base ten blocks is _____.

