

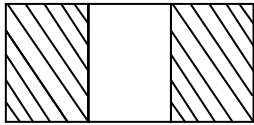
Name _____

Date _____

Partition Circles and Rectangles - Matching Worksheet

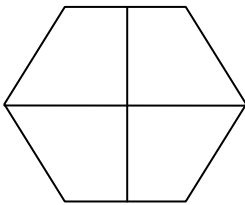
Match the pictures with their halves, thirds or fourths.

1.)



a Thirds

2.)



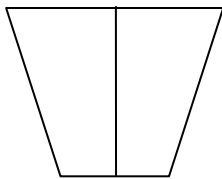
b $\frac{1}{4}$

3.)



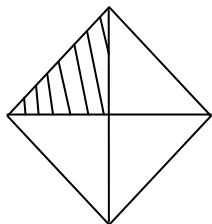
c Halves

4.)



d Fourths

5.)



e $\frac{2}{3}$

