

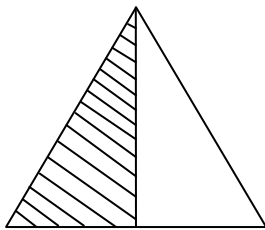
Name _____

Date _____

Partition Circles and Rectangles Independent Practice Worksheet

What fraction of shape is filled?

1.)




$2/2$

$3/2$

$0/1$

$1/2$

2.)



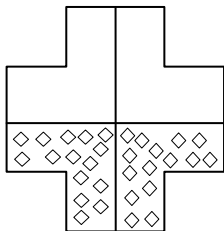
$5/10$

$6/7$

$5/8$

$6/8$

3.)



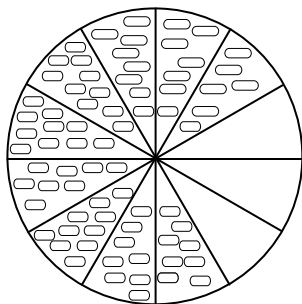
$3/5$

$2/4$

$1/4$

$3/4$

4.)



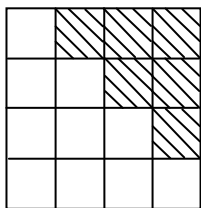
$6/10$

$10/12$

$3/12$

$9/12$

5.)



$6/16$

$8/16$

$4/15$

$9/18$

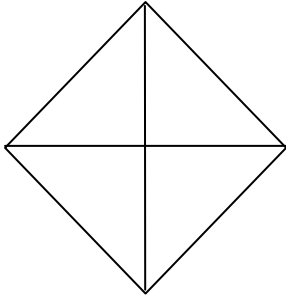


Name _____

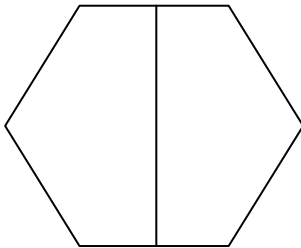
Date _____

Label the drawings below as halves, thirds or fourths.


6.)




7.)



8.)



9.)



10.)

