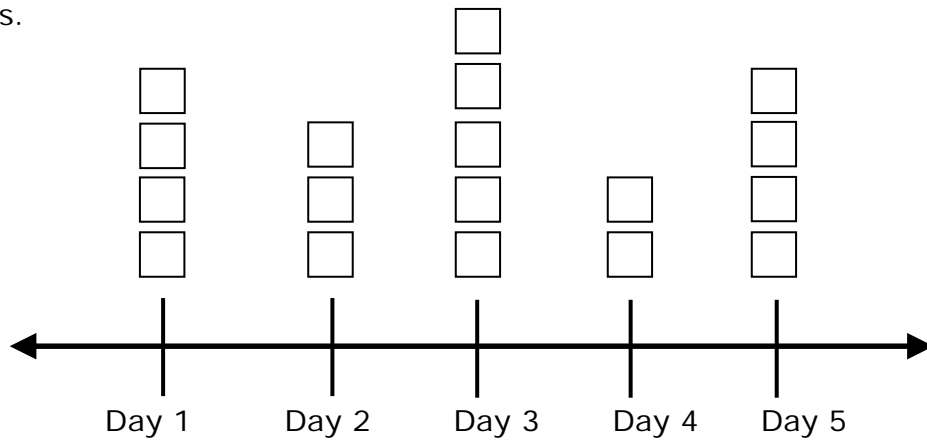


### Generate Measurement Data Word Problems - Independent Practice

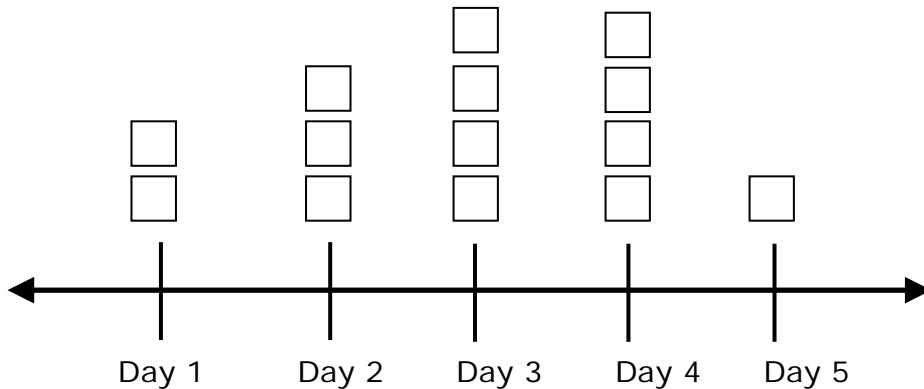
Complete all the problems. Make sure to draw pictures to help you solve the problems.

1.



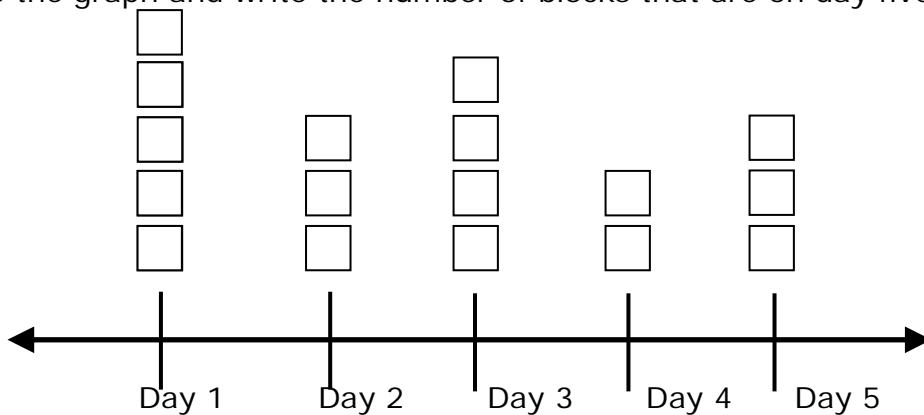
Analyze the graph and write the number of blocks that are on day three.

2.



Analyze the graph and write the number of blocks that are on day five.

3.



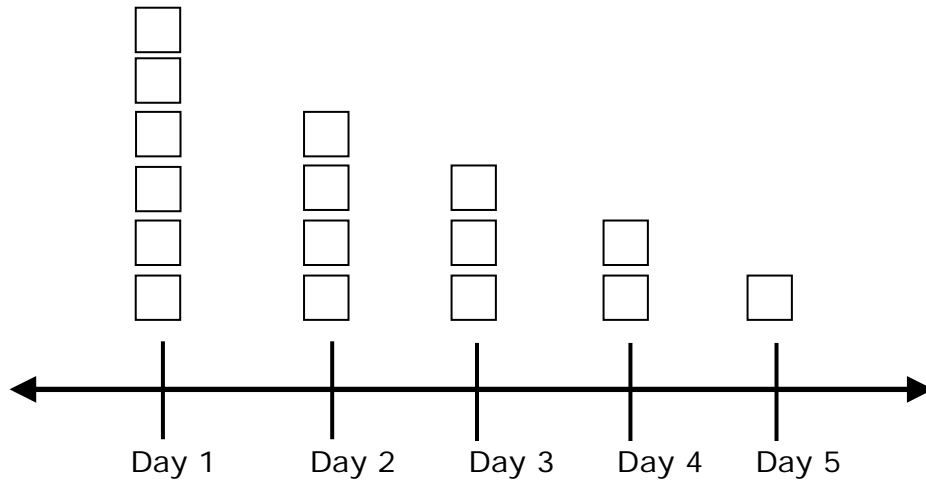
Analyze the graph and write the number of blocks that are on day two.



Name \_\_\_\_\_

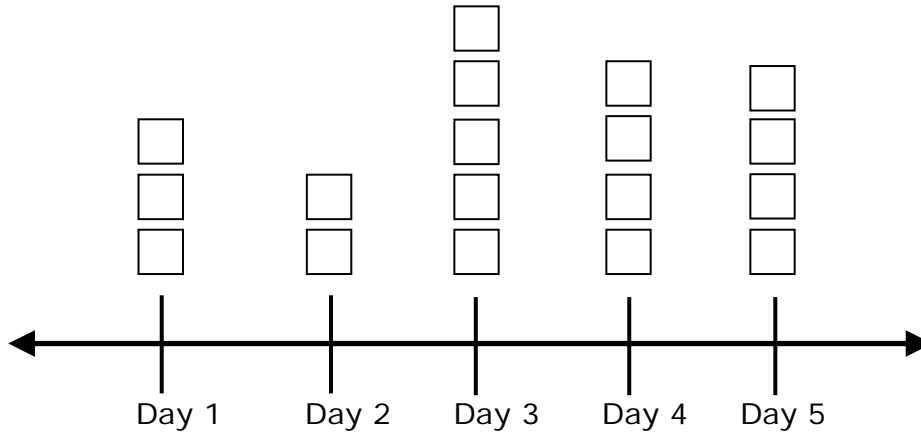
Date \_\_\_\_\_

4.



Analyze the graph and write the number of blocks that are on day one.

5.



Analyze the graph and write the number of blocks that are on day four.

6. In the hospital, we had some employees work overtime.

Make a line plot based on the data chart below.

| Days | Employees |
|------|-----------|
| 1    | 2         |
| 2    | 3         |
| 3    | 5         |
| 4    | 4         |
| 5    | 1         |



Name \_\_\_\_\_

Date \_\_\_\_\_

7. In the bakery shop, they prepared some cakes.

Make a line plot based on the data chart below.

| Days | Cakes |
|------|-------|
| 1    | 4     |
| 2    | 3     |
| 3    | 5     |
| 4    | 2     |
| 5    | 4     |

8. In the fruit shop, we bought some fruit over the week days.

Make a line plot based on the data chart below.

| Days | Fruit |
|------|-------|
| 1    | 1     |
| 2    | 3     |
| 3    | 2     |
| 4    | 2     |
| 5    | 4     |

9. In the Austin office they trained employees over the period of a week.

Make a line plot based on the data chart below.

| Days | Employees |
|------|-----------|
| 1    | 4         |
| 2    | 2         |
| 3    | 5         |
| 4    | 3         |
| 5    | 1         |



Name \_\_\_\_\_

Date \_\_\_\_\_

10. In a park, a number of new gardeners were asked to work over the week.

Make a line plot based on the data chart below.

| Days | Gardeners |
|------|-----------|
| 1    | 6         |
| 2    | 3         |
| 3    | 4         |
| 4    | 3         |
| 5    | 5         |

