

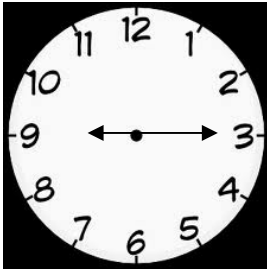
Name _____

Date _____

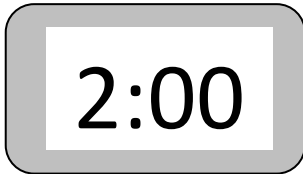
Time from analog and digital clocks - Step-by-Step Lessons

Write the time from the clock by using a.m and p.m according to Robert's activity.

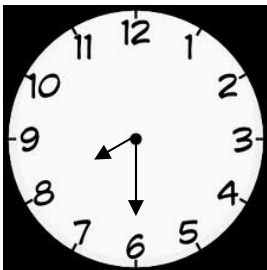
1. Robert's breakfast time.



2. Robert's lunch time.



3. Robert's dinner time.



Explanation:

Step 1) First we look what is being asked.

What is the time on the given clock?



Name _____

Date _____

Step 2)

a.) Digital Clocks show us the time using numbers. The number on the left side is the hour, and the number on the right is the minutes.

b.) Analog clocks use hands to show us hours and minutes.

c.) The Little hand shows hours and big hand shows minutes.

How to use a.m and p.m?

-We use a.m for morning time i.e., from 12 midnight to 12 noon.

-We use p.m for afternoon, evening and night time i.e., At 12 noon till 12 midnight.

Step 3)

1. Robert's breakfast time: - 9:15 a.m

2. Robert's lunch time: - 2:00 p.m

3. Robert's dinner time: - 8:30 p.m

