

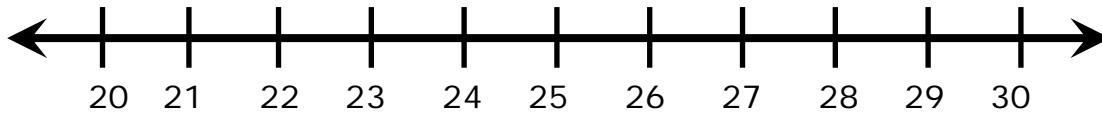
Name _____

Date _____

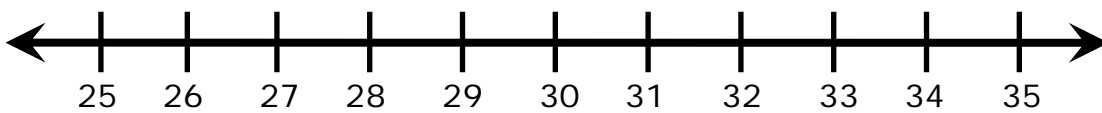
Number Lines and Whole Numbers - Independent Practice Worksheet

Represent the sums on the number line:

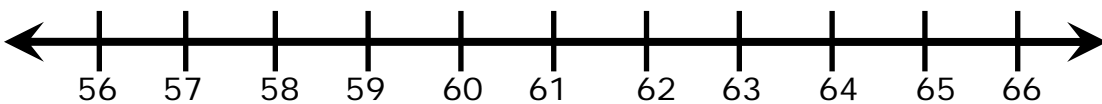
1. $21 + 9 = \underline{\quad}$



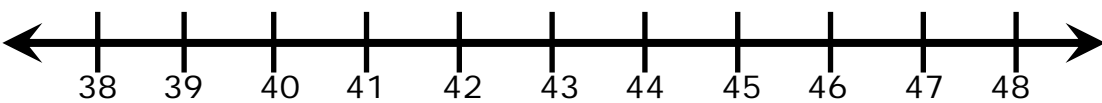
2. $35 - 8 = \underline{\quad}$



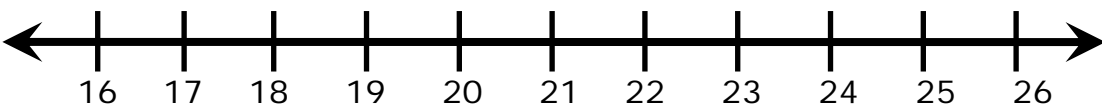
3. $58 + 4 = \underline{\quad}$



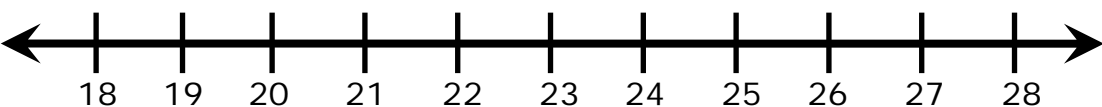
4. $44 - 6 = \underline{\quad}$



5. $18 + 8 = \underline{\quad}$



6. $28 - 9 = \underline{\quad}$

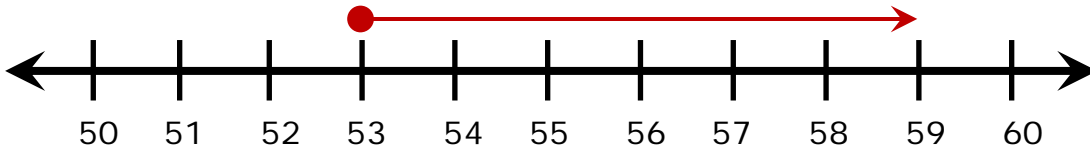


Name _____

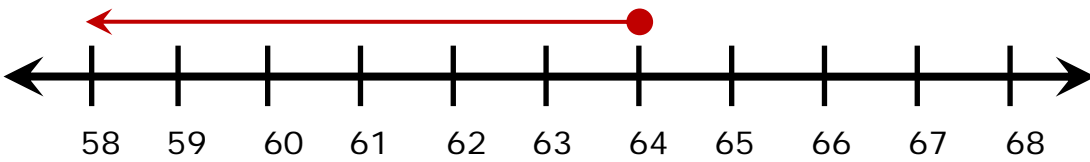
Date _____

Write the equation of sum or difference with the help of number line:

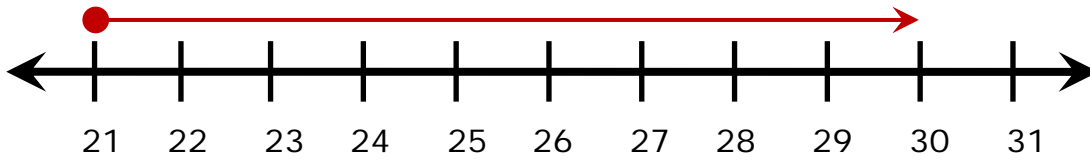
7.



8.



9.



10.

