

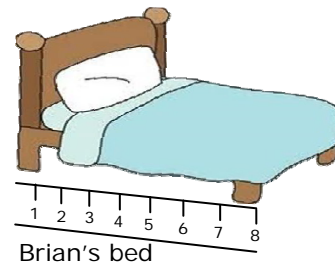
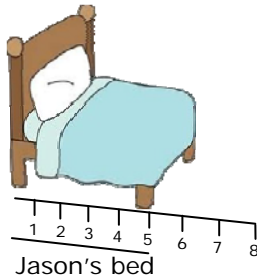
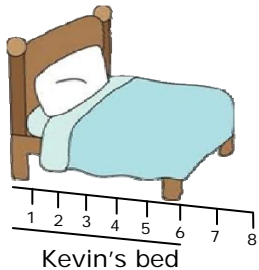
Name \_\_\_\_\_

Date \_\_\_\_\_


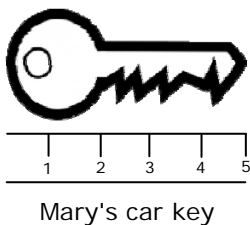
### Length Addition and Subtraction Word Problems - Guided Lesson

Answer the following questions:

1) Kevin's bed is 6 feet long. Jason's bed is 1 foot shorter than Kevin's. Brian's bed is 2 feet longer than Kevin's. Who has the shortest bed?



2) Mary's car key is 5 centimeters long. Betty's car key is 2 centimeters shorter than Mary's. Who has the longer car key?



3) Laura's school bus is 9 meters long. James's school bus is 2 meters shorter than Laura's. Denial's school bus is 1 meter longer than Laura's. Which school bus is longer than 9 meters?

