

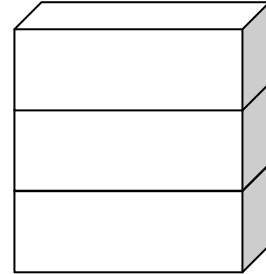
Name \_\_\_\_\_

Date \_\_\_\_\_

Topic: Picture-based Measurement: Worksheet 1

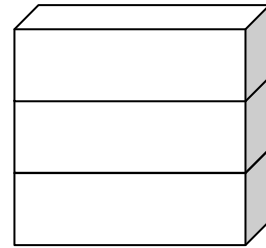
The frog is \_\_\_\_\_ cubes tall.

1.



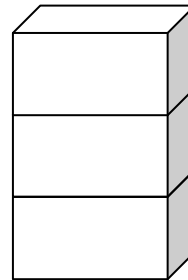
The bee is \_\_\_\_\_ cubes tall.

2.



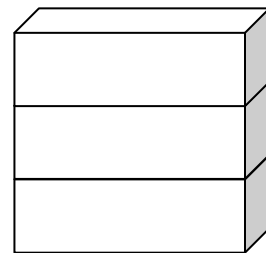
The dog is \_\_\_\_\_ cubes tall.

3.



The tiger is \_\_\_\_\_ cubes tall.

4.

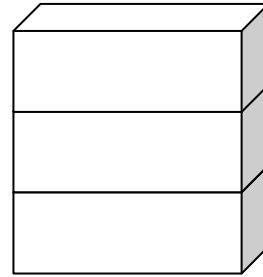


Name \_\_\_\_\_

Date \_\_\_\_\_

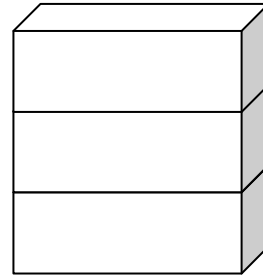
The chicken is \_\_\_\_\_ cubes tall.

5.



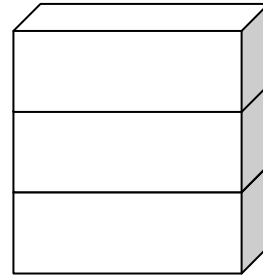
The crow is \_\_\_\_\_ cubes tall.

6.



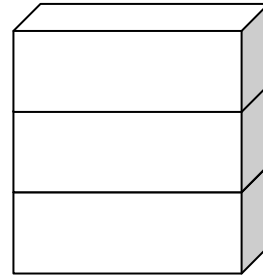
The cow is \_\_\_\_\_ cubes tall.

7.



The sheep is \_\_\_\_\_ cubes tall.

8.



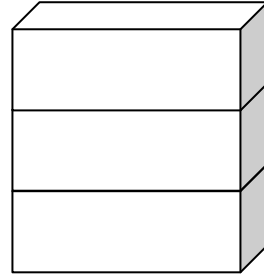

Name \_\_\_\_\_

Date \_\_\_\_\_

Topic: Picture-based Measurement: Worksheet 2

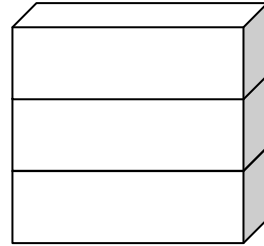
The ant is \_\_\_\_\_ cubes tall.

1.



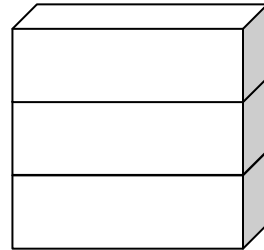
The duck is \_\_\_\_\_ cubes tall.

2.



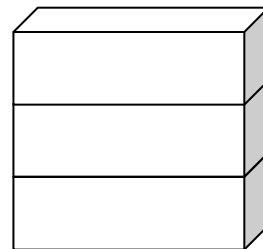
The mouse is \_\_\_\_\_ cubes tall.

3.



The monkey is \_\_\_\_\_ cubes tall.

4.

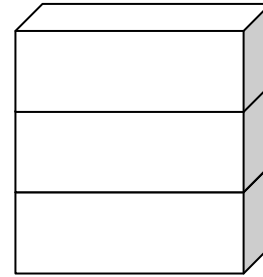



Name \_\_\_\_\_

Date \_\_\_\_\_

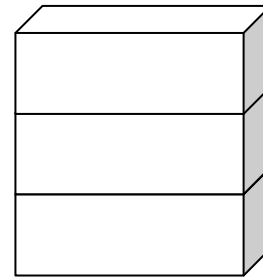
The banana is \_\_\_\_\_ cubes tall.

5.



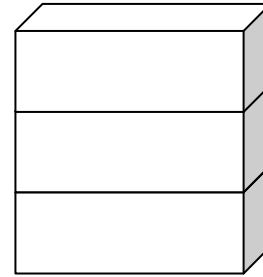

The boy is \_\_\_\_\_ cubes tall.

6.



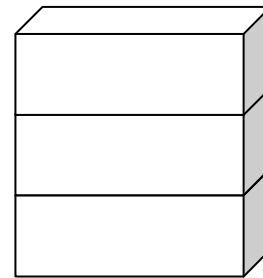

The grapes are \_\_\_\_\_ cubes tall.

7.



The boat is \_\_\_\_\_ cubes tall.

8.



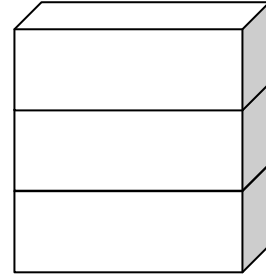
Name \_\_\_\_\_

Date \_\_\_\_\_

Topic: Picture-based Measurement: Worksheet 3

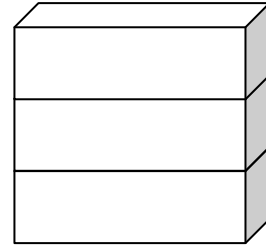
The girl is \_\_\_\_\_ cubes tall.

1.



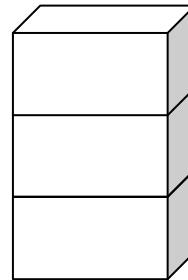
The robot is \_\_\_\_\_ cubes tall.

2.



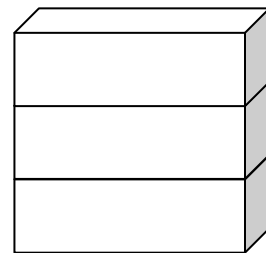
The duck is \_\_\_\_\_ cubes tall.

3.



The tree is \_\_\_\_\_ cubes tall.

4.

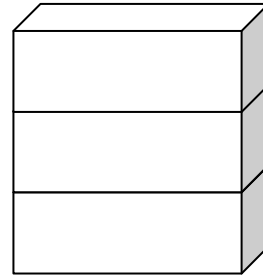


Name \_\_\_\_\_

Date \_\_\_\_\_

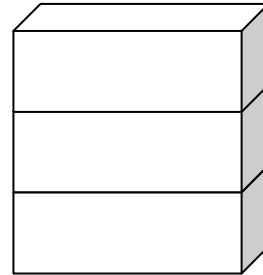
The soldier is \_\_\_\_\_ cubes tall.

5.



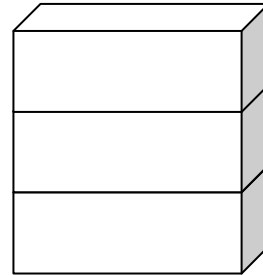

The giraffe is \_\_\_\_\_ cubes tall.

6.



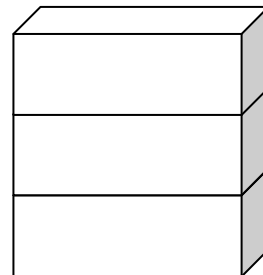
The toy is \_\_\_\_\_ cubes tall.

7.



The cat is \_\_\_\_\_ cubes tall.

8.



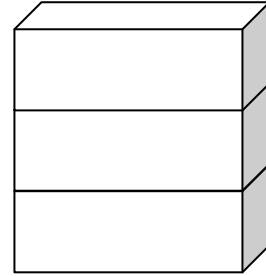
Name \_\_\_\_\_

Date \_\_\_\_\_

Topic: Picture-based Measurement: Worksheet 4

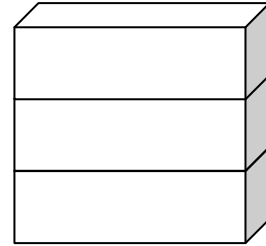
The duck is \_\_\_\_\_ cubes tall.

1.



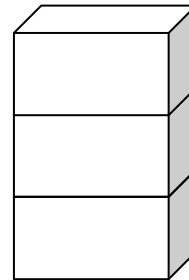
The peacock is \_\_\_\_\_ cubes tall.

2.



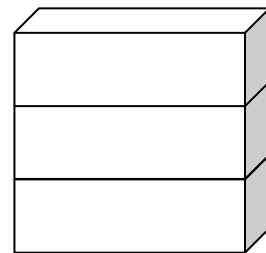
The sparrow is \_\_\_\_\_ cubes tall.

3.



The clock is \_\_\_\_\_ cubes tall.

4.

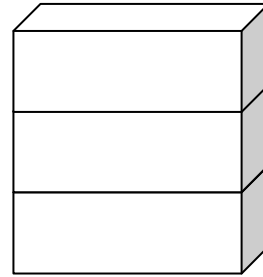


Name \_\_\_\_\_

Date \_\_\_\_\_

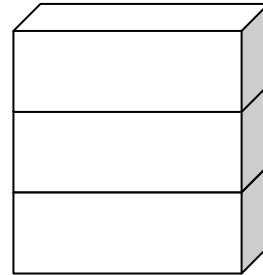
The girl is \_\_\_\_\_ cubes tall.

5.



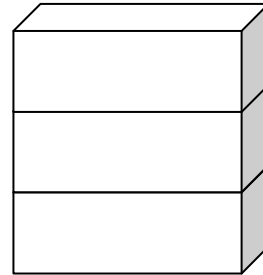

The woman is \_\_\_\_\_ cubes tall.

6.



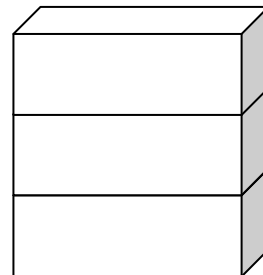

The crocodile is \_\_\_\_\_ cubes tall.

7.



The fish is \_\_\_\_\_ cubes tall.

8.





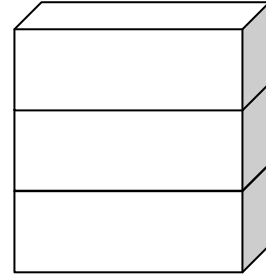

Name \_\_\_\_\_

Date \_\_\_\_\_

Topic: Picture-based Measurement: Worksheet 5

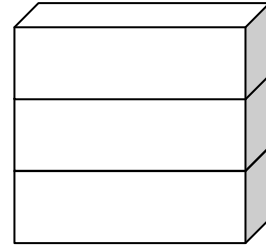
The rat is \_\_\_\_\_ cubes tall.

1.



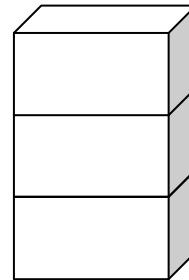
The horse is \_\_\_\_\_ cubes tall.

2.



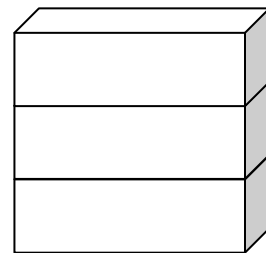
The lion is \_\_\_\_\_ cubes tall.

3.



The dog is \_\_\_\_\_ cubes tall.

4.

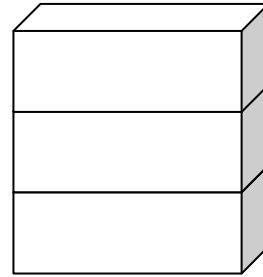


Name \_\_\_\_\_

Date \_\_\_\_\_

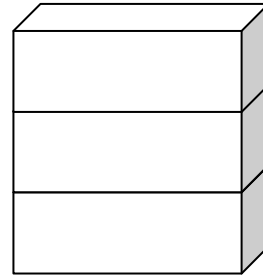
The deer is \_\_\_\_\_ cubes tall.

5.



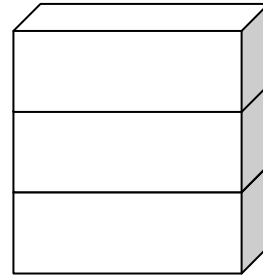
The fish is \_\_\_\_\_ cubes tall.

6.



The butterfly is \_\_\_\_\_ cubes tall.

7.



The elephant is \_\_\_\_\_ cubes tall.

8.

