


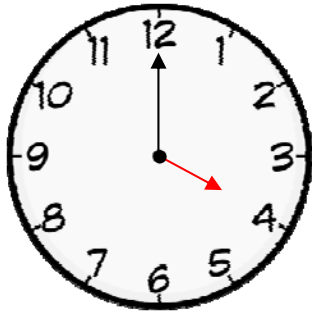
Name _____

Date _____

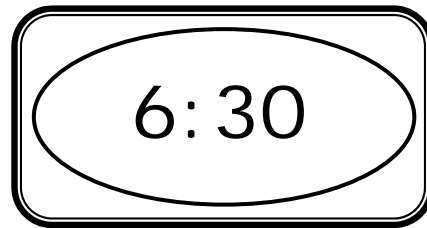
Hours and Half Hours of Time - Step-by-Step Lesson

Tell the time on both of the clocks.

Analog clock



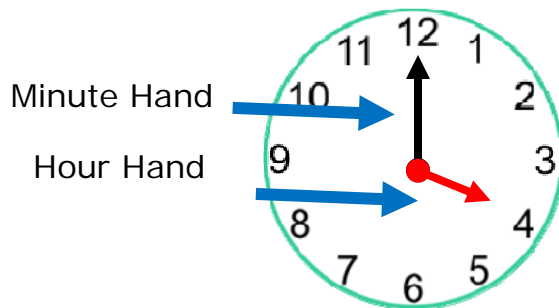
Digital clock



Explanation:

Analog Clock: What is the time on the analog clock?

The analog clock has two moving parts on the clock i) Hour hand ii) Minute hand. The hour hand (red) is smaller and the minute hand (black) is larger. The hour hand shows the hours and the minute hand shows the minutes.



If the minute hand goes fully around the clock then it is an hour (60 minutes). The 12 is the start of the hour. If the minute hand goes half way around then it is a half hour (30 minutes) and it should be on 6.

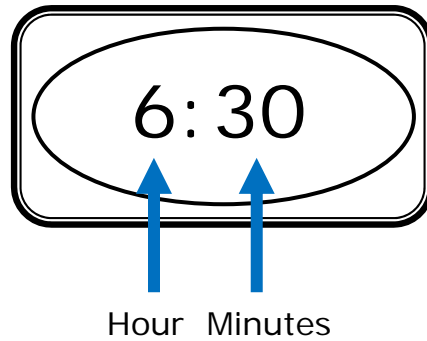
So, if we look at both hands on the clock, we can find out the time. The minute hand is on 12 meaning it is the beginning of hour. The hour hand tells us the hour is 4. So it is the beginning of the 4th hour or 4 o'clock.



Name _____

Date _____

Digital Clock: What is the time on the digital clock?



Digital Clocks show us the time using numbers. The number on the left is the Hour. The number on the right is Minutes. So, the time on the clock is six-thirty.

