


Name \_\_\_\_\_

Date \_\_\_\_\_

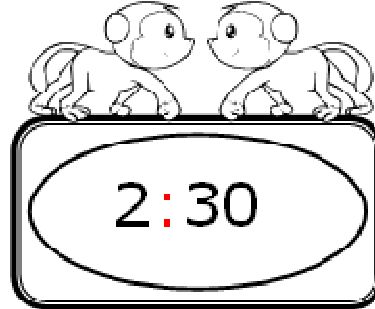
**Hours and Half Hours of Time Guided Lesson**

Answer the following questions:

1) Look at the clocks and tell the time:

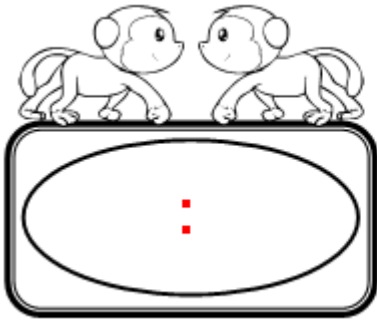


\_\_\_\_\_



\_\_\_\_\_

2) Show the given time on the clock:



Five o'clock

\_\_\_\_\_



Nine-thirty

\_\_\_\_\_

3) Draw minute hands with the help of given time:



Twelve o'clock

\_\_\_\_\_



Four-thirty

\_\_\_\_\_

