

Name _____

Date _____

Two- digit numbers - Independent Practice Worksheet

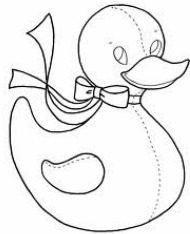
A. Complete the following questions and fill in the blanks by 10 more than the given numbers.

1.




27

2.



53

3.



31

4.




4





Name _____


Date _____

B. Complete the following questions and fill in the blanks by 10 less than the given numbers.

1. 70 

2. 64 

3. 55 

4. 83 

C. Fill in the blanks by 10 more or 10 less than the given numbers to complete the pattern.

1. _____ 55 _____

2. _____ 47 _____ 77 _____

