

Name _____


Date _____

Visual Sum and Difference Word Problems - Guided Lesson

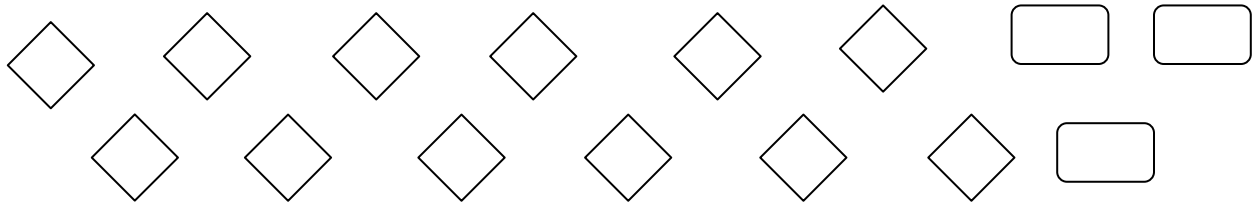
Complete the following problems:

1) Jeni and Anna invite 30 people to their home for a birthday party. If 20 of the people they invited came, how many of the people that they invited did not come?


Currently, Jeni and Anna have people in their home:



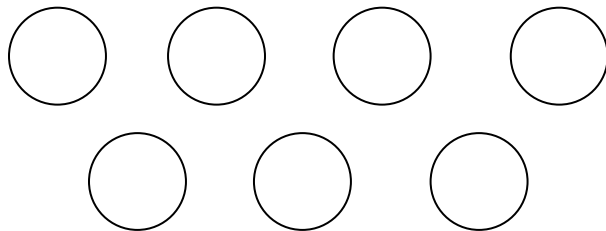
2) Remington baked 12 cupcakes and 3 pies for Diana. How many more cupcakes than pies did he bake?



3. Lara removes 10 eggs from a box. There were originally 50 eggs in the box. How many eggs are left in the box? And there are 7 bottle caps in a box and Lara puts 7 more bottle caps inside, how many bottle caps are in the box?



Eggs



Bottle cap

