

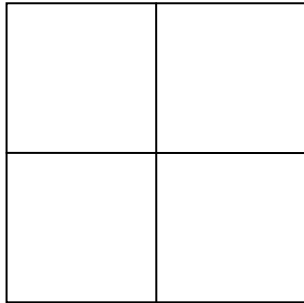
Name \_\_\_\_\_

Date \_\_\_\_\_

## Partitioning Circles and Rectangles - Guided Lesson


Complete the following problems:

1.) The shape below has been broken into parts. Label the shape as being broken into quarters or halves.



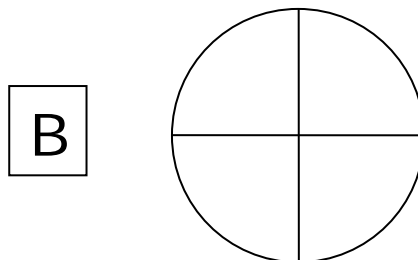
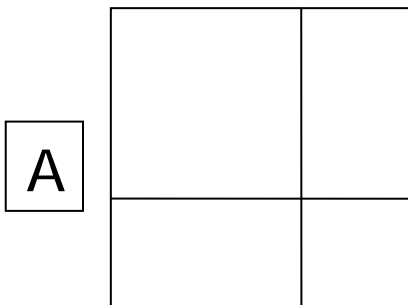
\_\_\_\_\_

2.) The shape below has been broken into parts. Label the shape as being broken into quarters or halves.



\_\_\_\_\_

3.) Identify which shape is in quarters?



\_\_\_\_\_

