

Name \_\_\_\_\_


Date \_\_\_\_\_

## Organizing and Understanding Data - Guided Lesson

Solve problems below:

1) The school has fewer geography teachers than history and English teachers. The diagram below shows the number of teachers the school has.

English teachers



History teachers



Geography teachers



- A) How many geography teachers are in school?
- B) Which subject area has the most teachers?
- C) Which subject area has the least number of teachers?



Name \_\_\_\_\_

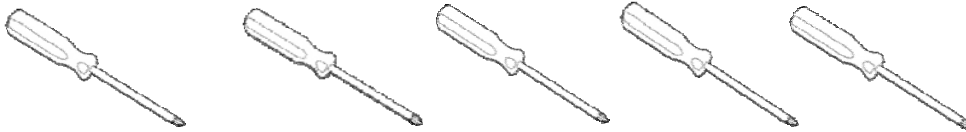
Date \_\_\_\_\_

2) The hardware store has 2 hammers. It also has screwdrivers and drills. The diagram below shows the number of tools in store.

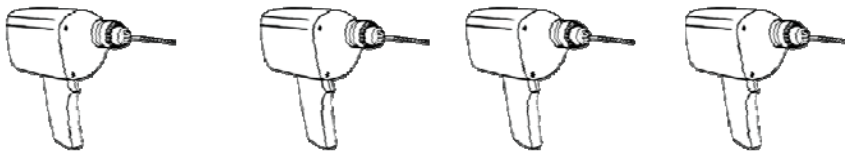
Hammers



Screw drivers



Drills



- A) How many drills are there in the store?
- B) Which tool does the store have the most of?
- C) How many tools does the store have?



Name \_\_\_\_\_

Date \_\_\_\_\_

3) Joe and his friend were counting vehicles in the parking lot. They focused on sports cars, pickup trucks, buses. The diagram below shows the number of vehicles in the parking lot

buses



trucks



cars



A) How many cars are there in the parking lot?

B) How many vehicles does the lot have?

C) Which vehicle is there the most of in the lot?

