

Name \_\_\_\_\_

Date \_\_\_\_\_

**Properties of operations as strategies - Guided Lesson:**

Complete the following problems:


1. Fill in the blanks.

$$(4+7)+10 = 4+(7+10)$$



$$\square + 10 = 4 + \square$$

$$\square = \square$$


2. Add the pictures according to commutative property.



+



+



3. Rewrite the expression  $(3 + 6) + 7$  using the associative property.

