

Name \_\_\_\_\_


Date \_\_\_\_\_

### Addition and Subtraction Word Problems Guided Lesson:

Complete the following problems:

1) Jennifer runs two penguin farms. She gives the penguins a safe place to live and plenty of food. She currently has 8 penguins on the farm at Hillshire Meadows. She plans to move 5 of those penguins to her other farm. How many penguins will be left at Hillshire Meadows when those 5 penguins leave?


Hillshire Farms Currently:




2) Brooke travels the country with her horses. She always takes 2 horses to her riding competitions. She is returning home from her latest competition. As she returns, she sees 4 of her other horses in the meadow. How many horses does Brooke own?



3. Reese's family loves ice hockey. Ice hockey is played with a hard rubber puck. Reese and his brother John collect pucks. The pucks that Reese and John found this month can be found below. Who found the most pucks, this month? How many more pucks did they find than the other person?



Reese



John

