

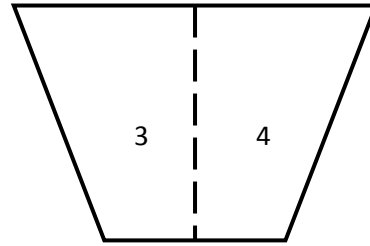
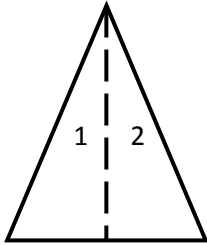
Name _____

Date _____

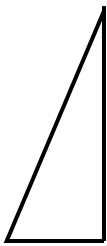
Making Two-Dimensional Shapes - Guided Lesson

Complete the following problems:

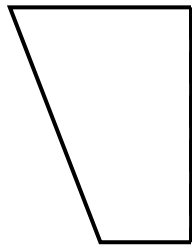
1)



Write the number on the pieces below that fit into the shapes above.



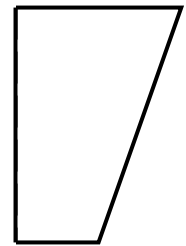
A



B

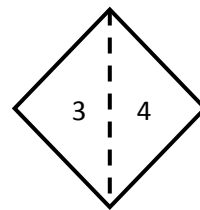
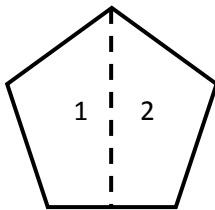


C

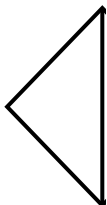


D

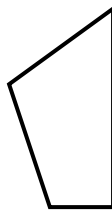
2)



Write the number on the pieces below that fit into the shapes above.



A



B



C



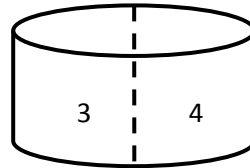
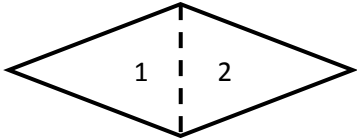
D




Name _____

Date _____

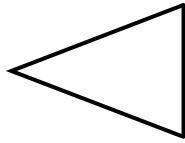
3)




Write the number on the pieces below that fit into the shapes above.



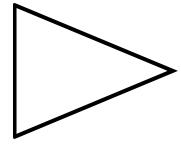
A



B



C



D

