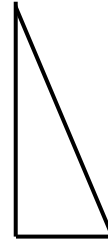
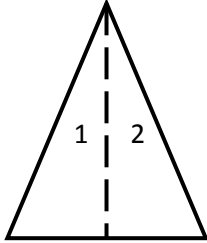


## Making Two-Dimensional Shapes - Guided Lesson Explanation

### Explanation to #1

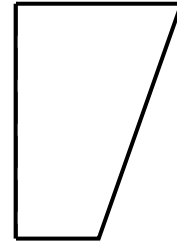

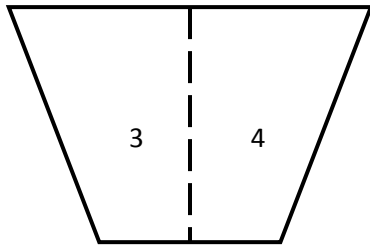
A and C fit nicely into the areas of 1 and 2.

3 and 4 are matched up with letters B and D.



**A**

**C**



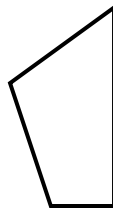
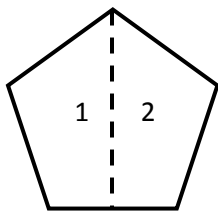
**B**

**D**

### Explanation to #2

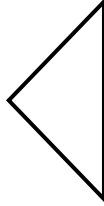
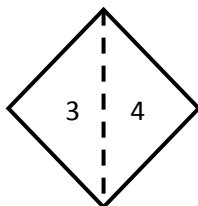
Observe pieces and match them with shapes.

Write the number of pieces belong to shapes.



**B**

**D**



**A**

**C**



Name \_\_\_\_\_

Date \_\_\_\_\_

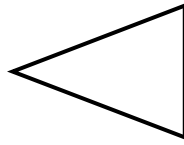
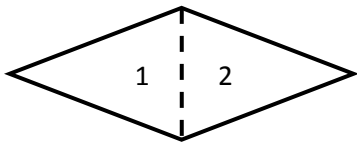
### Explanation to #3

Step 1) First we look to see what is being asked of us.

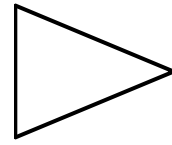
“Number on the pieces below that find into the shapes.”

Observes pieces and match them with shapes.


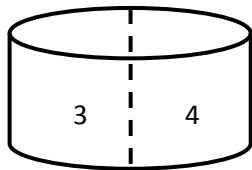
While the number of pieces belong to shapes.




**B**



**D**



**A**



**C**

