


Name \_\_\_\_\_

Date \_\_\_\_\_

## Telling Time - Whole Hour Lesson


Write the time using the expression o' clock.



\_\_\_\_\_

The shorter hand is the hour hand. It tells us the hour.

The longer hand is the minute hand. It tells us the number of minutes.




First, find the hour hand. The hour hand is at 2. The hour is 2.

Next, find the minute hand. The minute hand is at 12. It means 0 minutes.

The time is 2 o'clock or 2 hours and zero minutes.

This clock shows 2 o'clock.



2 o'clock

