

Name _____

Date _____

Telling Time – Half Hour Practice Worksheet

Write the time using the expression half past.

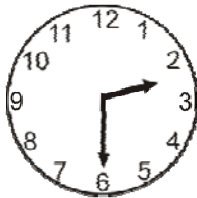
1



2



3



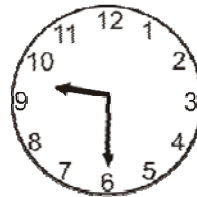
4




5



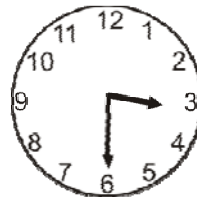
6



7



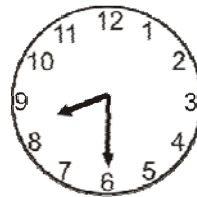
8



9



10





Name _____

Date _____

Answer Key

1

Half past 10

2

Half past 7

3

Half past 2

4

Half past 5

5

Half past 4

6

Half past 9

7

Half past 1

8

Half past 3

9

Half past 11

10

Half past 8

