

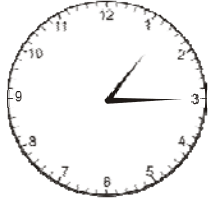
Name _____

Date _____

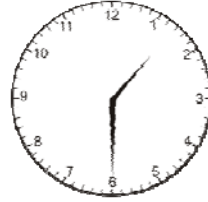
Telling Time – By Fifteen Minutes Practice Worksheet

What time is it? Answer using digits and a colon (for example, 11:15).


1



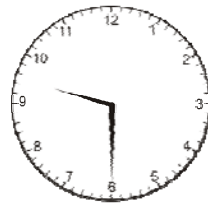
2



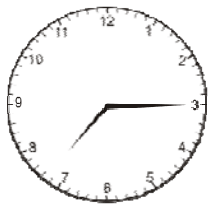
3



4



5



6



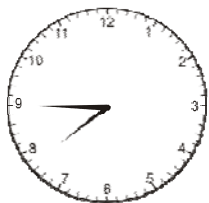
7



8



9



10



Name _____

Date _____

Answer Key

<input type="checkbox"/> 1	1:15	<input type="checkbox"/> 2	1:30	<input type="checkbox"/> 3	2:45	<input type="checkbox"/> 4	9:30	<input type="checkbox"/> 5	7:15
<input type="checkbox"/> 6	3:15	<input type="checkbox"/> 7	4:30	<input type="checkbox"/> 8	5:15	<input type="checkbox"/> 9	7:45	<input type="checkbox"/> 10	12:45

