


Picture Subtraction - Guided Lesson Explanation

Explanation#1

There are 4 flowers in first group from left.

1 in second group which you can cross out.



We subtracted 1 from 4. Count the flowers that are on the left.

There are 3 flowers left.

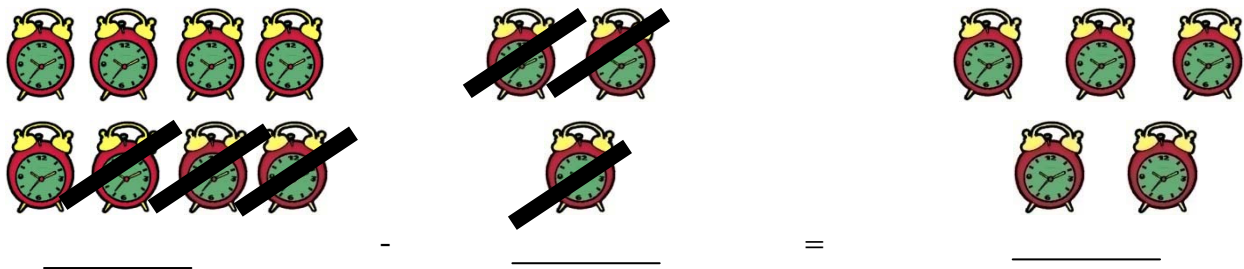
So, $4 - 1 = 3$.

Explanation#2

There are 8 clocks first group from left.

3 clocks are in the second group which are crossed out.

We subtracted 3 from 8, count the clocks that left there.



There are 5 clocks left.

So, $8 - 3 = 5$.




Name _____

Date _____

Explanation#3

There are 5 jelly cakes in the first group from left.

3 cakes are in the second group which are crossed out.



We subtracted 3 from 5 and count the jellies that are left there.

There are 2 jellies left.

So, $5 - 3 = 2$.

