
















Name _____ Date _____

Find the Missing Coin 1

Find the value of the missing coin. Write the value of each coin.

 + ? +  = Total 65 ¢ ____ ¢ ____ ¢ ____ ¢	 + ? +  = Total 31 ¢ ____ ¢ ____ ¢ ____ ¢
 + ? = Total 60 ¢ ____ ¢ ____ ¢	? +  = Total 35 ¢ ____ ¢ ____ ¢
 + ? +  = Total 52 ¢ ____ ¢ ____ ¢ ____ ¢	 + ? + ? = Total 40 ¢ ____ ¢ ____ ¢ ____ ¢
? +  +  = Total 16 ¢ ____ ¢ ____ ¢ ____ ¢	? +  +  = Total 80 ¢ ____ ¢ ____ ¢ ____ ¢
 + ? = Total 15 ¢ ____ ¢ ____ ¢	? +  = Total 26 ¢ ____ ¢ ____ ¢

