

Name \_\_\_\_\_


Date \_\_\_\_\_

## Above and Below, Left and Right - Matching Worksheet

Write the letter of the answer that matches the problem.

1. Circle all the objects above the clock. Draw a rectangle around all the objects below the Clock.

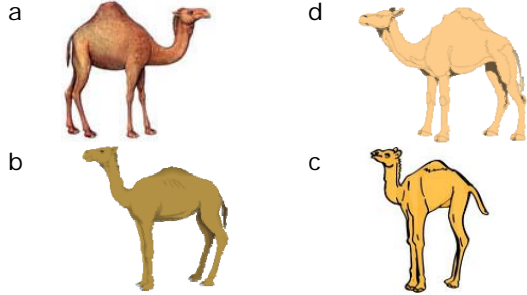
\_\_\_\_\_



a.  
a.

2. Circle the camel that is facing Right.

\_\_\_\_\_



b. Above- G, I, L  
Below- H, J, K

3. Circle all the objects above the Airplane. Draw a rectangle around all the objects below the Airplane.

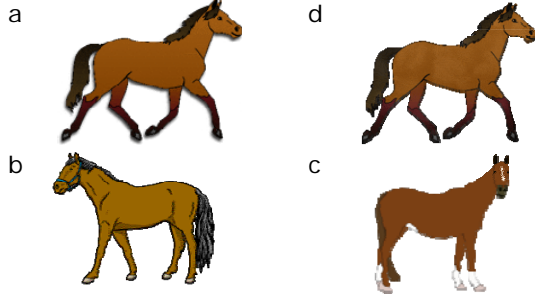
\_\_\_\_\_



b.  
c.

4. Circle the horse that is facing Left.

\_\_\_\_\_



d. Above- A, B, C  
Below- D, E, F

