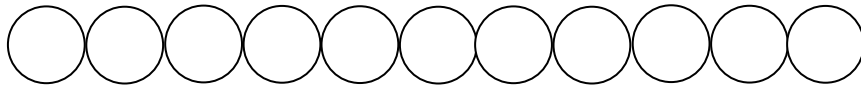


Name _____

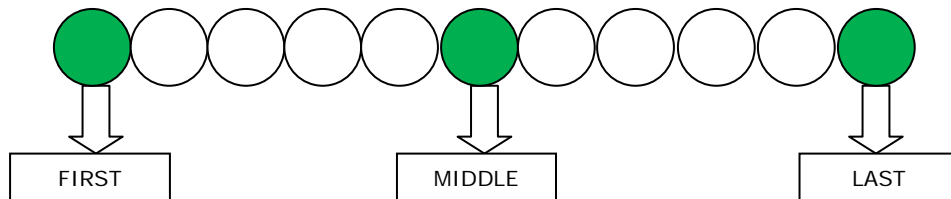
Date _____

Positional Ordinal Numbers Lesson and Practice

Determine the position. Color the MIDDLE 3 shapes red.



To solve this question first we need to determine the POSITION of the circle from where we will start coloring.

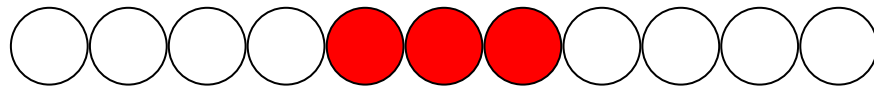


First = the position farthest to the left.

Last = the position farthest to the right.

Middle = position where equal amounts are found to the left and right.

Here, the POSITION is MIDDLE. Start counting MIDDLE 3 circles and color them.



Practice Problems

Color the MIDDLE 3 shapes red.

1



2

