





Name _____

Date _____





Transportation Pictograph Worksheet

A survey was done asking people about their favorite means of transport. The following data was obtained.

	Car	X	X	X	X	X	
	Bus	X	X	X			
	Motor bike	X	X	X	X	X	X
	Cycle	X	X				

Use the data graph to answer the questions.

1	How many people chose cycle as their favorite means of transport?
2	How many more people chose motor bike than cycle?
3	What was the most popular means of transport?
4	How many less people chose bus than car?
5	How many people answered the survey?
6	What was the least popular means of transport?
7	How many people did not choose bus as their favorite means of transport?
8	How many more people chose car than cycle?
9	How many less people chose bus than motor bike?
10	Make a data table for the above picture graph to show the result.

			
Car	Bus	Motor bike	Cycle

