

Name _____

Date _____


Congruent Shapes - Independent Practice Worksheet

Complete all the problems. Identify the relationship between the shapes and write "C" for congruent or "N" for non congruent.

1.



2.




3.



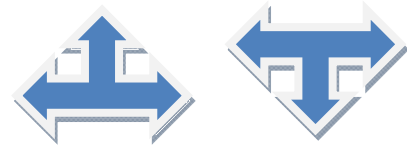
4.



5.



6.




7.



8.



9.



10.

