

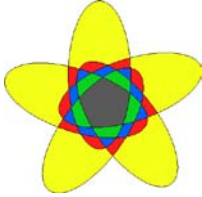
Name: _____

Date _____

Topic: Rotational Symmetry - Worksheet 1

Write the Order of Rotational Symmetry


1.



2.




3.



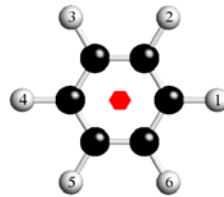
4.



5.



6.



7.



8.



9.



10



Name: _____

Date _____

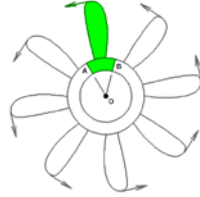
Topic: Rotational Symmetry - Worksheet 2

Write the Order of Rotational Symmetry

1.




2.



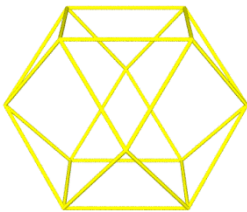
3.



4.



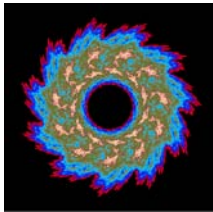
5.



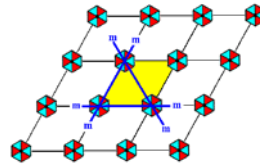
6.




7.




8.



9.



10



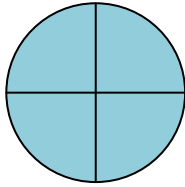
Name: _____

Date _____

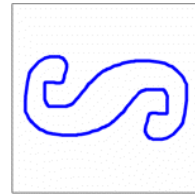
Topic: Rotational Symmetry - Worksheet 3

Write the Order of Rotational Symmetry

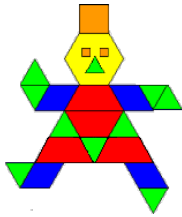
1.



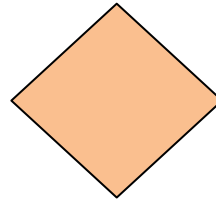
2.



3.



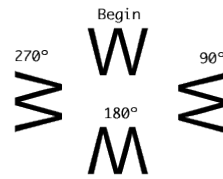
4.



5.




6.




7.




8.



9.



10



Name: _____

Date _____

Topic: Rotational Symmetry - Worksheet 4
Write the Order of Rotational Symmetry


1.



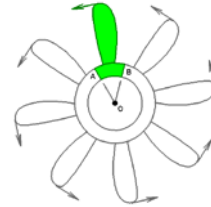
2.



3.



4.



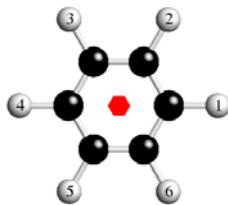
5.




6.



7.



8.



9.



10.

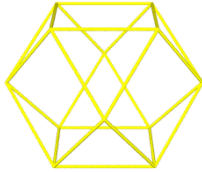


Name: _____

Date _____

Topic: Rotational Symmetry - Worksheet 5
Write the Order of Rotational Symmetry

1.



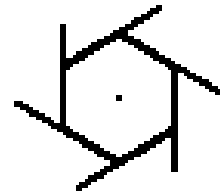
2.



3.



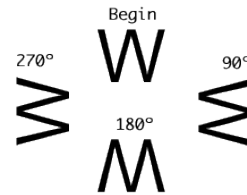
4.



5.



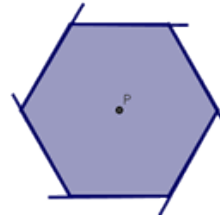
6.



7.



8.



9.



10

