

Name _____

Date _____

Estimating Length - - Independent Practice Worksheet

Complete all the problems.

1



8 feet 8 inches 8 meters 8 centimeters

2




6 feet 6 inches 6 meters 6 centimeters

3



20 feet 20 inches 20 meters 20 centimeters

4



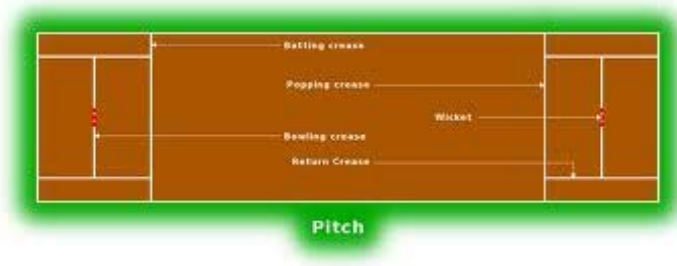
5 feet 5 inches 5 meters 5 centimeters



Name _____


Date _____

5



22 feet 22 inches 22 meters 22 centimeters

6.



7 feet 7 inches 7 meters 7 centimeters

7.



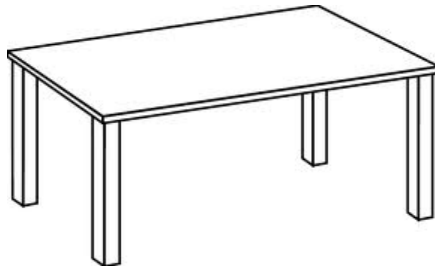
4 feet 4 inches 4 meters 4 centimeters



Name _____

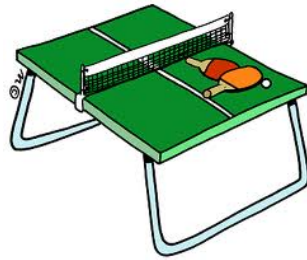
Date _____

8.



12 feet 12 inches 12 meters 12 centimeters

9.



3 feet 3 inches 3 meters 3 centimeters

10.



10 feet 10 inches 10 meters 10 centimeters

