

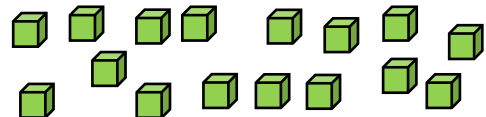









Name \_\_\_\_\_

Date \_\_\_\_\_

## Division In a Visual Setting Worksheet

Divide into equal groups.

1		There are ___ scissors. Make groups of 5. How many groups? ____ How many 5's are there in ____? ____
2		There are ___ stars. Make groups of 3. How many groups? ____ How many 3's are there in ____? ____
3		There are ___ cubes. Make groups of 4. How many groups? ____ How many 4's are there in ____? ____
4		There are ___ arrows. Make groups of 4. How many groups? ____ How many 4's are there in ____? ____
5		There are ___ smiles. Make groups of 8. How many groups? ____ How many 8's are there in ____? ____
6		There are ___ hearts. Make groups of 2. How many groups? ____ How many 2's are there in ____? ____
7		There are ___ pineapples. Make groups of 3. How many groups? ____ How many 3's are there in ____? ____
8		There are ___ balls. Make groups of 6. How many groups? ____ How many 6's are there in ____? ____
9		There are ___ cups. Make groups of 2. How many groups? ____ How many 2's are there in ____? ____
10		There are ___ lamps. Make groups of 5. How many groups? ____ How many 5's are there in ____? ____

