


Name \_\_\_\_\_

Date \_\_\_\_\_


### Visual Division Lesson and Practice

Divide into equal groups.

	<p>There are ___ stars. Make groups of 5.</p> <p>How many groups? _____</p> <p>How many 5's are there in ____? ____</p>
---	---

First, count the numbers of stars given. There are 15 stars.


Now, we have to make groups of 5.





So, Number of groups are = Total numbers of stars / 5  
 =  $15/5 = 3$

There are three 5's in 15.

Answer:

	<p>There are <u>15</u> stars. Make groups of 5.</p> <p>How many groups? <u>3</u></p> <p>How many 5's are there in <u>15</u>? <u>3</u></p>
---	---

### Practice Problems

<p>1</p>		<p>There are ___ arrows. Make group of 2.</p> <p>How many groups? _____</p> <p>How many 2's are there in ____? ____</p>
<p>2</p>		<p>There are ___ drops. Make groups of 7.</p> <p>How many groups? _____</p> <p>How many 7's are there in ____? ____</p>

