


Name _____

Date _____

Division as Sharing - Independent Practice Worksheet


Complete all the problems. Write how many of the objects each item gets.

1.




Share the flowers so that each butterfly has five more than the last one.

2.



Share the eggs so that each toy has five more than the last one.

3.





Share the strawberries so that each cake has two more than the last one.



Name _____


Date _____

4.



Share the tires so that each bicycle has three more than the last one.

5.



Share the notes so that each instrument has three more than the last one.

6.



Share the stars so that each moon has four more than the last one.



Name _____

Date _____

7.




Share the mice so that each cat has two more than the last one.

8.



Share the Christmas balls so that each tree has five more than the last one.

9.





Share the pens so that each book has three more than the last one.



Name _____

Date _____

10.



Share the sheep so that each lion has two more than the last one.

