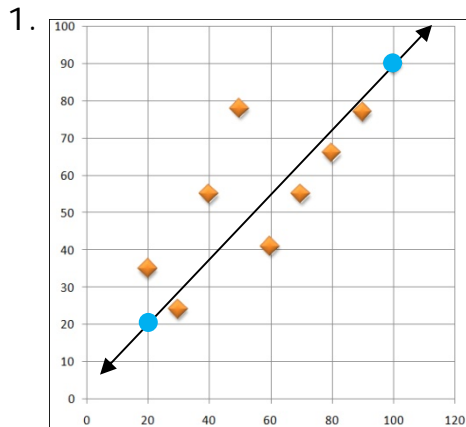


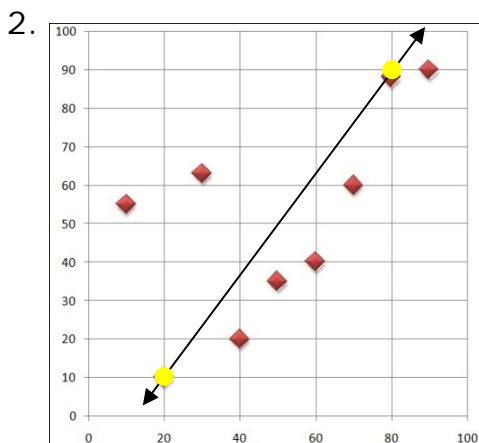
Scatter Plots of Linear Functions - Matching Worksheet

Write the letter of the answer that matches the problem.

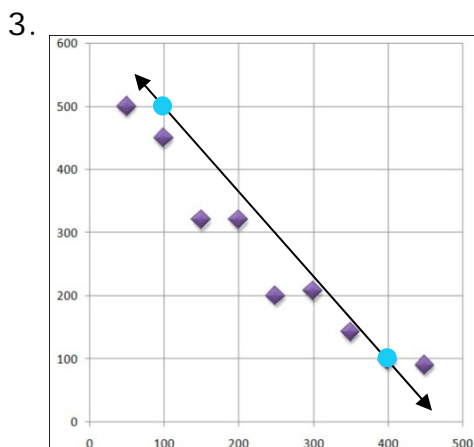
What are the equations of the trend line shown here?



a. $y = (4/3)x - 16.67$



b. $y = (7/8)x + 2.5$



c. $y = (-4/3)x + 633.33$

