


**Matching Pairs - Matching Worksheet**

Match groups that have the same number of objects. In the blanks provided, write the letter that represents the answer to each problem.

1. \_\_\_\_\_




5

a.

4



2. \_\_\_\_\_




4

b.

3




3. \_\_\_\_\_



6

c.

5



4. \_\_\_\_\_



3

d.

6

