

Name \_\_\_\_\_

Date \_\_\_\_\_

**Inside, Outside And Between - Guided Lesson**


Complete the following problems:

Write the position of the object on the line provided.

1)



Between




\_\_\_\_\_

-----

\_\_\_\_\_

2)



Outside



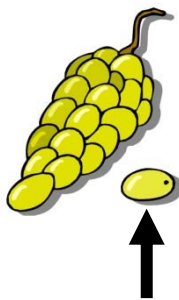
\_\_\_\_\_

-----

\_\_\_\_\_

3)

Outside



\_\_\_\_\_

-----

\_\_\_\_\_

