

Name \_\_\_\_\_

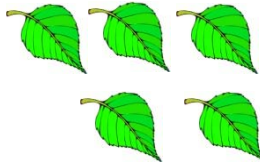
Date \_\_\_\_\_

## Compare Two Objects - Matching Worksheet

In the spaces provided, write the letter that represents the correct answer to each problem.

1. Circle the group that has more objects.

\_\_\_\_\_



2. Underline the number that corresponds to the number of 2s in the set.

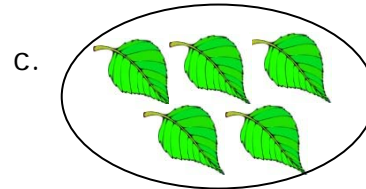

\_\_\_\_\_

**2 2 2 2 2 2** 5 3 4 6 2




3. Underline the group that has least number of objects in each row.

\_\_\_\_\_



4. Underline the group that has largest number of objects in a row.

\_\_\_\_\_



d. 6

