






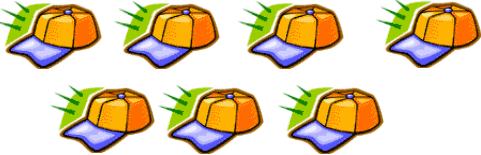




Name: _____

Date _____

Topic: Counting Number of Objects: Worksheet 1

Circle the number of objects

| | | | |
|----|---|-----|---|
| 1. |  | 2. |  |
| | 1 2 3 4 5 | | 1 2 3 4 6 |
| 3. |  | 4. |  |
| | 1 2 3 4 8 | | 1 2 3 4 10 |
| 5. |  | 6. |  |
| | 1 2 3 4 7 | | 5 2 3 4 6 |
| 7. |  | 8. |  |
| | 1 2 9 4 5 | | 1 2 7 4 6 |
| 9. |  | 10. |  |
| | 1 2 3 4 5 | | 1 2 3 4 7 |













Name: _____

Date _____

Topic: Counting Number of Objects: Worksheet 2

Circle the number of objects

| | | | |
|----|---|-----|--|
| 1. |  | 2. |  |
| | 1 2 3 4 5 | | 1 2 3 4 6 |
| 3. |  | 4. |  |
| | 7 2 3 4 8 | | 1 8 3 4 10 |
| 5. |  | 6. |  |
| | 1 2 5 4 7 | | 5 2 3 4 6 |
| 7. |  | 8. |  |
| | 1 2 9 4 5 | | 1 2 7 4 6 |
| 9. |  | 10. |  |
| | 1 2 3 4 5 | | 1 2 3 4 6 |








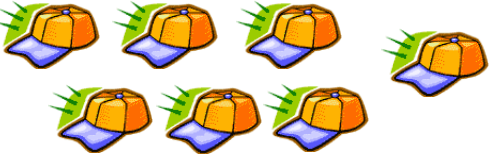




Name: _____

Date _____

Topic: Counting Number of Objects: Worksheet 3

Circle the number of objects

| | | | |
|----|---|-----|---|
| 1. |  | 2. |  |
| | 1 2 3 4 5 | | 1 2 3 4 6 |
| 3. |  | 4. |  |
| | 5 2 3 4 8 | | 1 8 3 4 10 |
| 5. |  | 6. |  |
| | 1 2 8 4 7 | | 5 2 3 4 6 |
| 7. |  | 8. |  |
| | 1 2 9 4 10 | | 1 2 7 4 6 |
| 9. |  | 10. |  |
| | 1 2 3 4 5 | | 1 2 3 4 6 |













Name: _____

Date _____

Topic: Counting Number of Objects: Worksheet 4

Circle the number of objects

| | | | |
|----|---|-----|--|
| 1. |  | 2. |  |
| | 1 2 3 4 5 | | 1 2 3 4 5 |
| 3. |  | 4. |  |
| | 1 2 3 4 5 | | 1 2 3 4 5 |
| 5. |  | 6. |  |
| | 1 2 3 4 5 | | 1 2 3 4 6 |
| 7. |  | 8. |  |
| | 1 2 3 4 5 | | 1 2 7 4 5 |
| 9. |  | 10. |  |
| | 1 2 3 4 5 | | 1 2 3 4 6 |








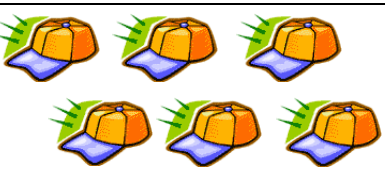




Name: _____

Date _____

Topic: Counting Number of Objects: Worksheet 5

Circle the number of objects

| | | | |
|----|---|-----|--|
| 1. |  | 2. |  |
| | 1 2 3 4 5 | | 1 2 3 4 5 |
| 3. |  | 4. |  |
| | 1 2 3 4 5 | | 1 2 3 4 5 |
| 5. |  | 6. |  |
| | 1 2 3 4 6 | | 8 2 3 4 6 |
| 7. |  | 8. |  |
| | 1 2 9 4 5 | | 1 2 7 4 6 |
| 9. |  | 10. |  |
| | 1 2 3 4 5 | | 1 2 3 4 7 |

