

Name: _____


Date _____

Measuring Weight and Length Step-by-Step Lesson


1. Circle the truck that is longer.



How to Answer #1: We need to figure out which of the two trucks covers more distance. An easy way to this is to draw a line for the longest side of each truck. This line will tell us which object covers the biggest distance.



Now just compare the two lines and we can see that truck one is longer.




Name: _____

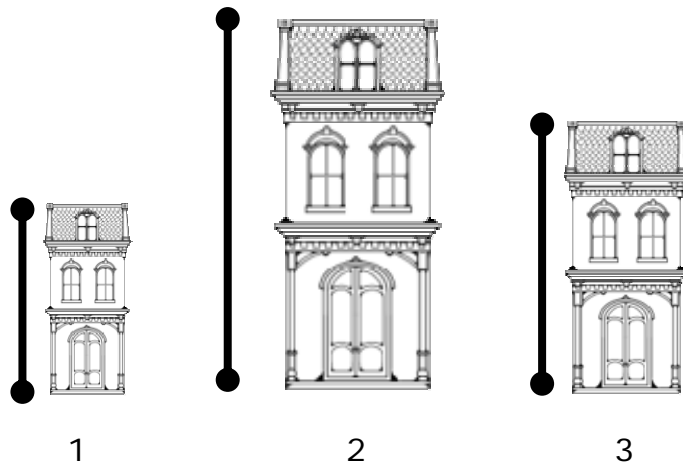
Date _____

You should circle truck #1.

2. Circle the building that is the tallest.



How to Answer #2: Draw lines that show the longest side of the houses. In this case, up to down is the longest side. Draw a line from top to the bottom of every house.



The lines show that number 2 is much larger. You should circle #2.

