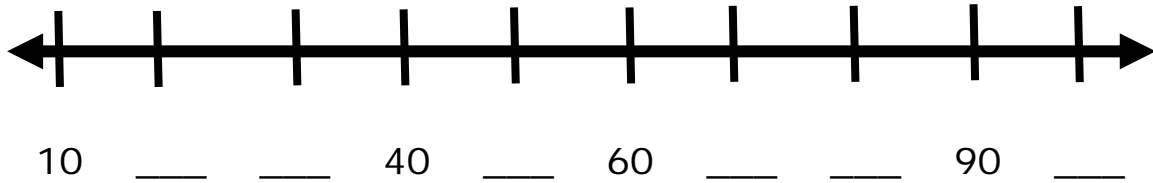


Name _____

Date _____



Counting Train Cars by 10s Worksheet

Fill in the missing numbers on the numbers lines below.



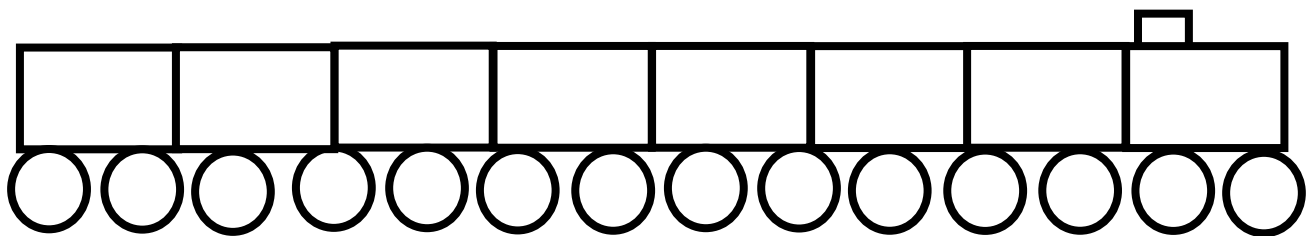
By 10s Trains

Be an engineer of the train and complete all of the sequences to get the trains to their destinations. Each train car can hold 10 passengers. All of the trains are full with passengers. How many passengers are there in total on each train?



A) This train is headed to Denver, Colorado.

How many passengers are on the train? _____



B) This train is headed to Miami, Florida.

How many passengers are on the train? _____

C) Draw a train with 100 passengers on it in the box below.

