





Name: \_\_\_\_\_

Date \_\_\_\_\_

## Counting Fish in the Pond Worksheet

Count the number of each of these types of fish in Mills Pond. Write the number in the box right below each fish. In the box below that number write how many of that type of fish would be in the pond if you added one more.

### Mills Pond

