

Name: _____

Date _____

Compare Sets of Objects Guided Lesson






1. Are there **fewer** whales or cartons of milk? _____

2. Are there more striped fish or cartons of milk? _____

3. How many objects above are living? _____

4. Make a data chart for the items above using the boxes below. The striped fish are already recorded for you.

								
								
	X	X	X	X				

