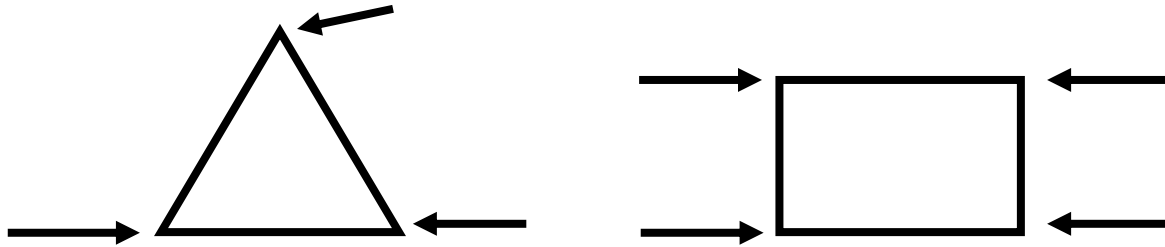


Name: _____

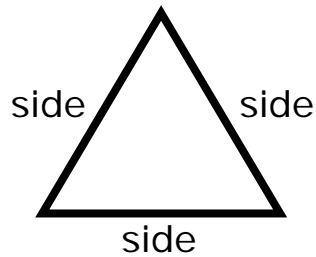
Date _____

Counting Corners and Sides of Shapes Lesson

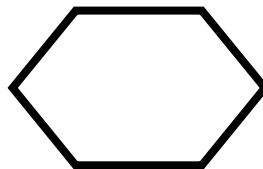
A **corner** of a shape is a place where two straight lines meet within the shape. Take a look at the diagrams below. The arrows point to the **corners**.



A side is a line that joins two corners. Look at the labeled sides below.



Practice: How many sides and corners does this shape have?



Answer: 6 sides, 6 corners

The arrows point to the sides. The numbers count the corners.

