


Name: _____

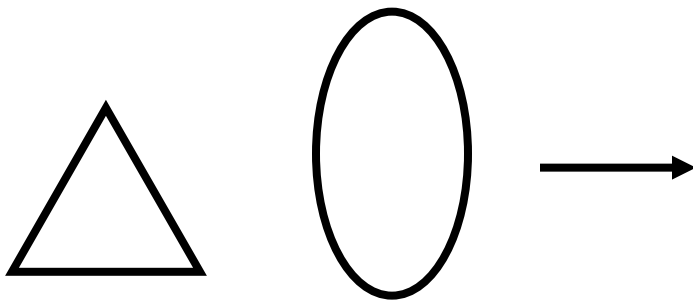
Date _____

Forming New Shapes from Old Shapes

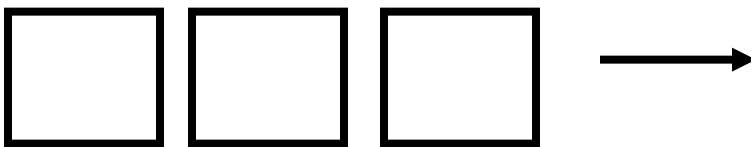
1. Draw how you could form a rectangle from the two triangles.



2. Draw how you would make the shape of a fish from a triangle and an oval.



3. Draw how you would make a rectangle from the three squares.



4. Draw how you would make a hexagon from six triangles.

