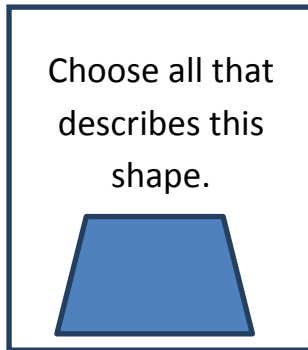


## Chilly Classification of Quadrilaterals

**Directions: Answer the following by classifying the quadrilaterals.**

1.



- Rhombus   
  Trapezoid   
  Square   
  Parallelogram

2.

- Parallelogram  
 Rhombus  
 Cylinder  
 Hexagon



Choose all that describes this shape.




3.

- Cube   
  Square   
  Trapezoid   
  Rhombus



Choose all that describes this shape.






Choose all that describes this shape.



4.

- Rectangle  Square  Triangle  Rhombus

Choose all that describes this shape.



5.

- Trapezoid  Rhombus  Octagon  Parallelogram



Choose all that describes this shape.



6.

- Hexagon  Quadrilateral  Rhombus  Trapezoid




## Chilly Classification of Quadrilaterals **Answer Key**

**Directions: Answer the following by classifying the quadrilaterals.**

**1.**


Choose all that describes this shape.




- Rhombus   
  Trapezoid   
  Square   
  Parallelogram




Choose all that describes this shape.



- Parallelogram  
 Rhombus  
 Cylinder  
 Hexagon



Choose all that describes this shape.



- Cube   
  Square   
 Trapezoid   
 Rhombus

Name \_\_\_\_\_

Date \_\_\_\_\_



Choose all that describes this shape.



4.



Rectangle



Square




Triangle



Rhombus

Choose all that describes this shape.



5.



Trapezoid



Rhombus



Octagon



Parallelogram



Choose all that describes this shape.



6.



Hexagon



Quadrilateral



Rhombus



Trapezoid

